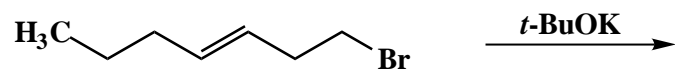


An example from the Spring 1998 Examination #1:

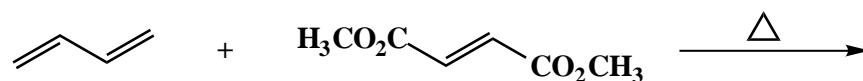
1. (25 points)

For each of the following five (5) questions draw the structure of the expected major organic product. If relevant, explicitly specify absolute and/or relative stereochemistry.

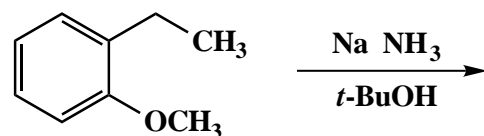
A.



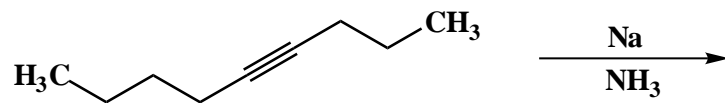
B.



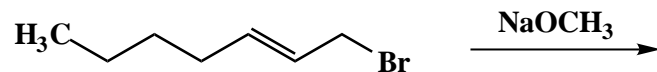
C.



D.



E.

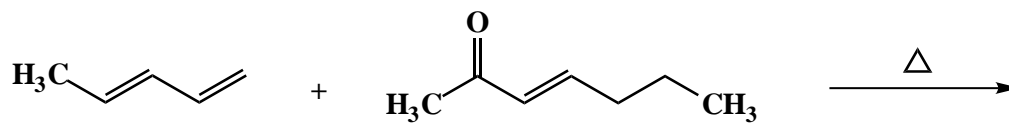


An example from the Summer 1998 Examination #1:

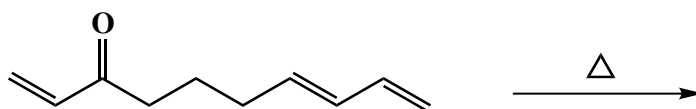
1. (25 points)

For each of the following five (5) questions, draw the structure of the expected major organic product. If relevant, explicitly specify absolute and/or relative stereochemistry.

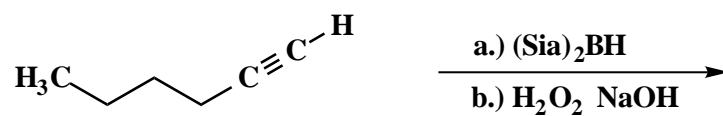
A.



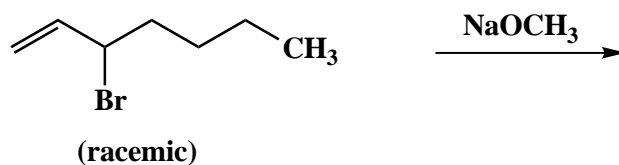
B.



C.



D.



E.

