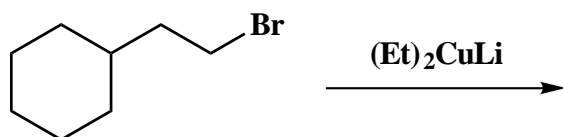


**An example from the Fall 1997 Hour Examination #1:**

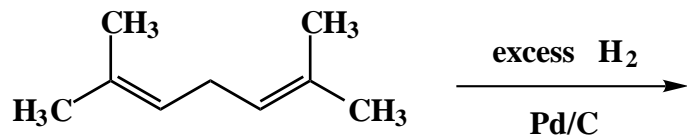
6. (15 points)

For each of the following five (5) questions draw the structure of the expected major organic product. If relevant, explicitly specify absolute and/or relative stereochemistry.

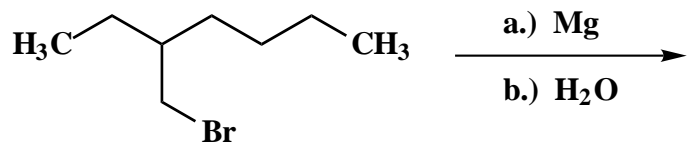
A.



B.



C.

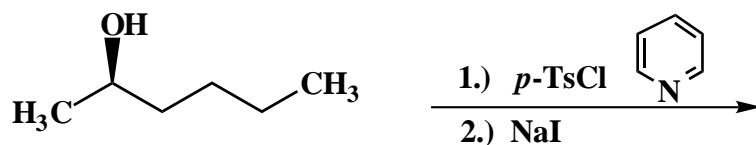


An example from the Fall 1998 Hour Examination #2:

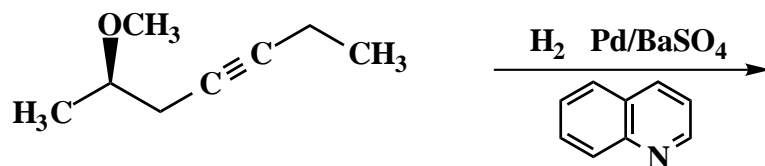
1. (25 points)

For each of the following five (5) questions draw the structure of the expected major organic product. If relevant, explicitly specify absolute and/or relative stereochemistry.

A.



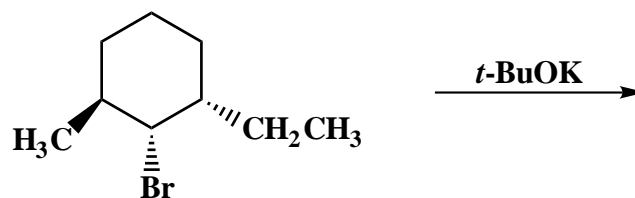
B.



C.



D.



E.

