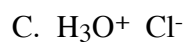


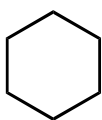
## Problem Set 1

1. Draw Lewis structures that correspond to each of the following condensed formulas.

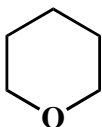


2. Draw Lewis structures that correspond to each of the following line-angle formulas.

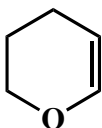
A.



B.



C.



3. Draw line-angle formulas that correspond to each of the following condensed formulas.

