

## An EASY Assignment

\* Lying is permitted on #1 and #2.

- 1.\* Estimate your height.

Measure your height.



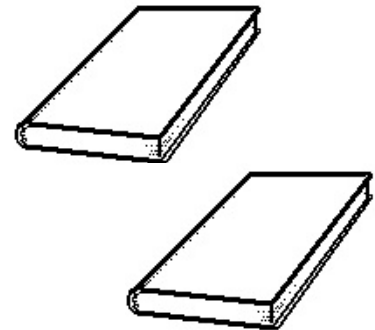
- 2.\* Estimate your weight.

Measure your weight.



3. Estimate the dimensions of your Math 310 textbook.

Measure them.



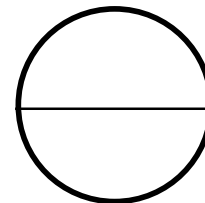
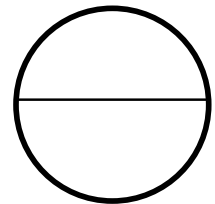
4. Find something circular. (Yes, you can find something: Wastebasket, dish, soup pot)

Estimate its diameter (distance straight across the center).

Estimate its circumference (distance all the way around).

Measure the diameter.

Measure the circumference.



5. Measure your bedroom.

How much would it cost you to replace your floor with new material at  $\$40/\text{yd}^2$